

Name : _____

Score : _____

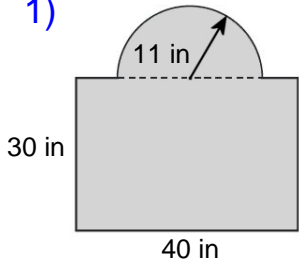
Teacher : _____

Date : _____

Compound Shapes

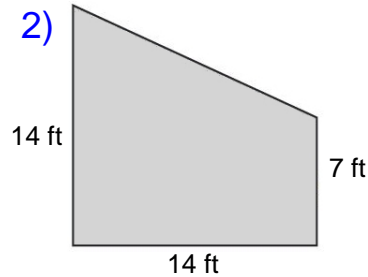
Find the area of each figure, round your answer to one decimal place if necessary.

1)



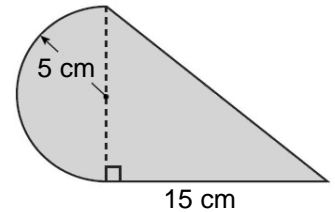
Area: _____

2)



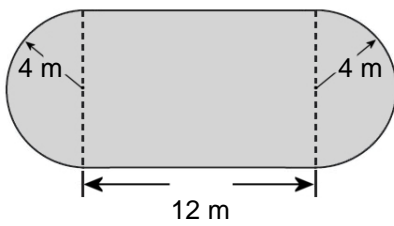
Area: _____

3)



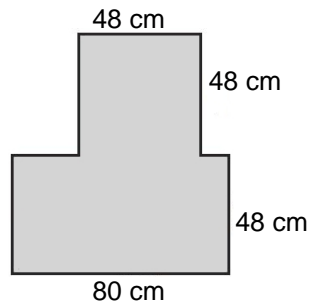
Area: _____

4)



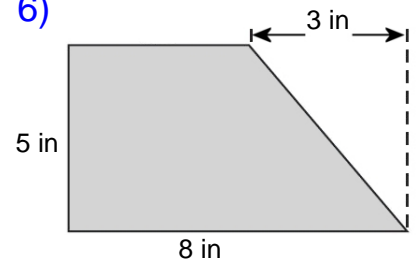
Area: _____

5)



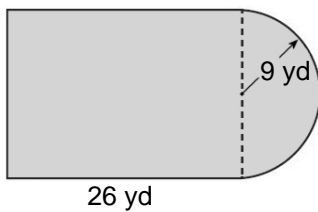
Area: _____

6)



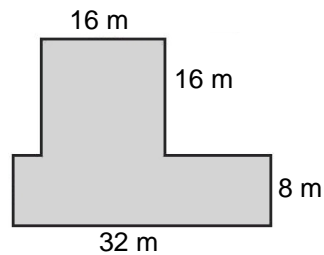
Area: _____

7)



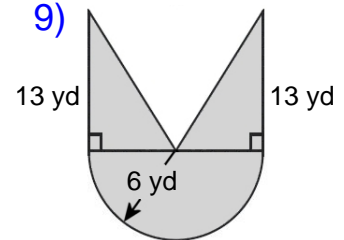
Area: _____

8)



Area: _____

9)



Area: _____

Name : _____

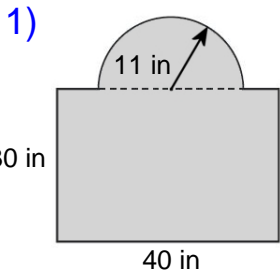
Score : _____

Teacher : _____

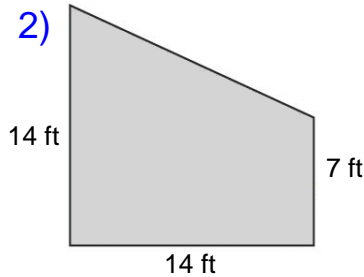
Date : _____

Compound Shapes

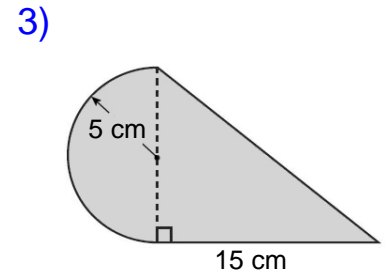
Find the area of each figure, round your answer to one decimal place if necessary.



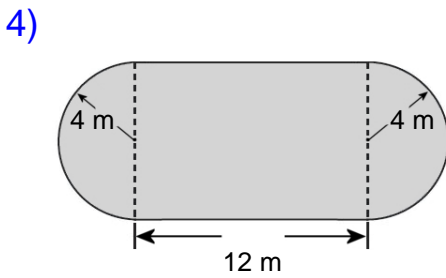
Area: 1390.1 in²



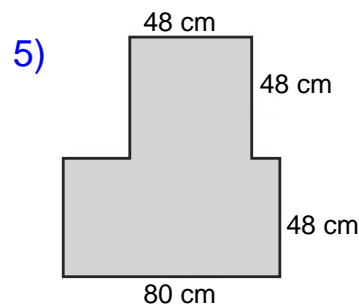
Area: 147 ft²



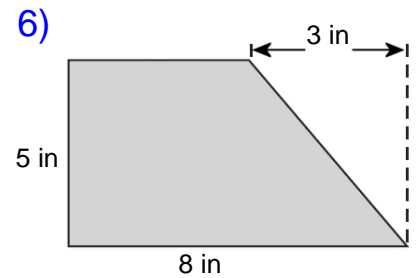
Area: 114.3 cm²



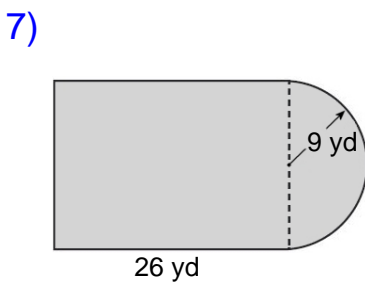
Area: 146.3 m²



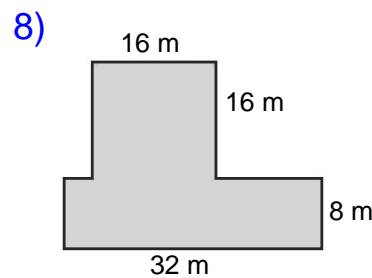
Area: 6144 cm²



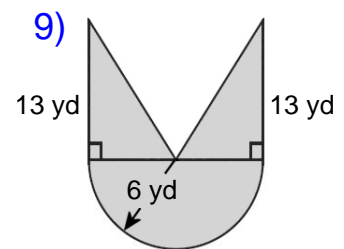
Area: 32.5 in²



Area: 595.2 yd²



Area: 512 m²



Area: 134.5 yd²